

Prénom :

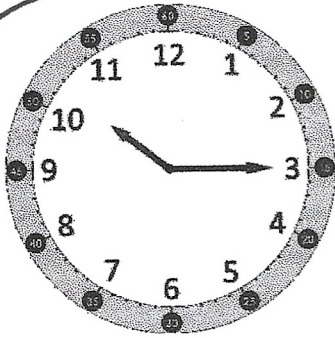
Date : 12 / 01 / 22

En lien avec la leçon

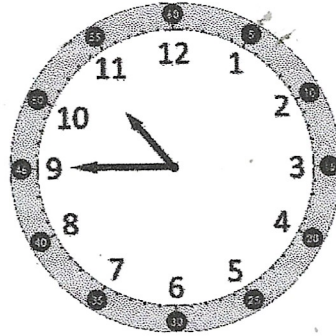
Correction

Lire l'heure sur une horloge à aiguilles

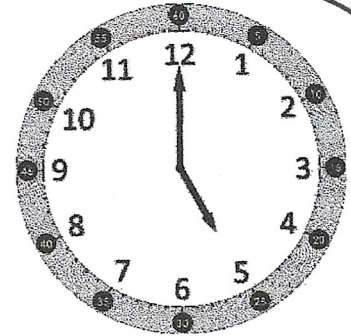
Exercice (1) : Indique l'heure qu'il est sur chaque horloge (c'est le matin).




10H15



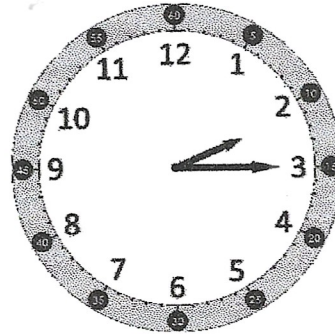
10H45



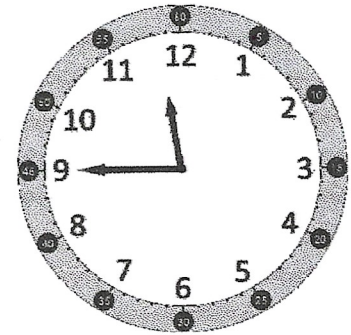
5H00



12H30

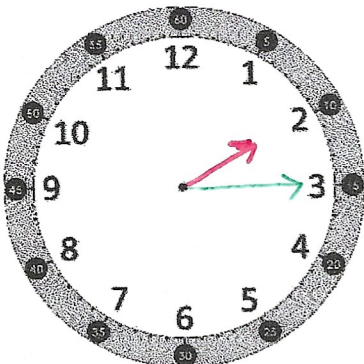


2H15

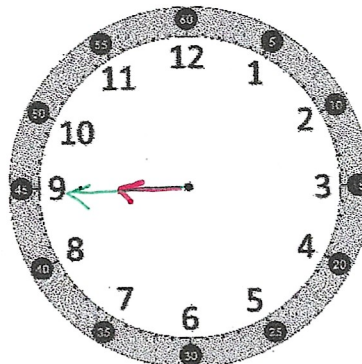


11H45

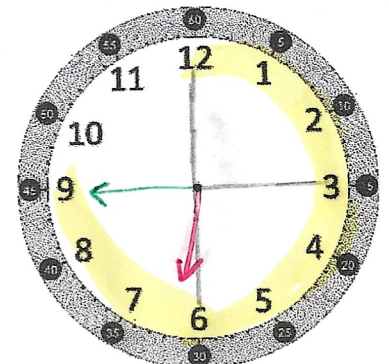
Exercice (2) : Trace les aiguilles correspondant à l'heure indiquée sous chaque horloge.



deux heures et quart



neuf heures moins le quart



six heures trois quarts